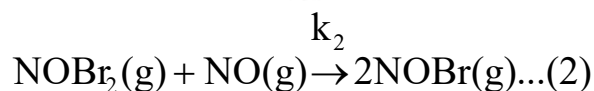
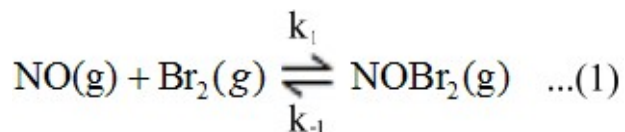


Chemistry 225 Semester 04-2016

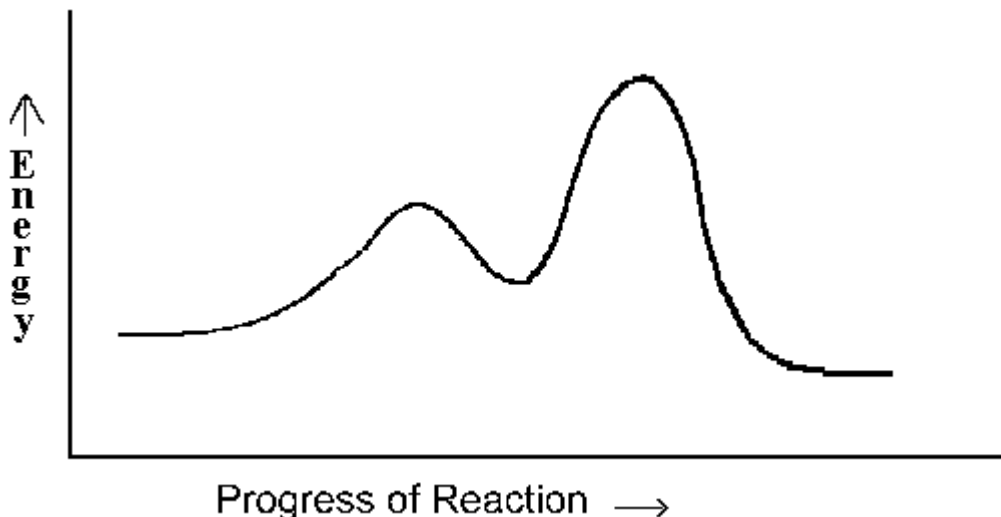
Homework for Submission #4a

Answer the following questions carefully and submit them for marking as instructed. Only answers showing full working may attract full marks. Careless and sloppy work will be penalised. Express your numerical answers to the correct number of significant figures. Make sure you include correct units where appropriate. *Answers showing evidence of copying will attract zero marks.*

- 1) The following mechanism has been proposed for the reaction of NO with Br₂ in the gaseous state:

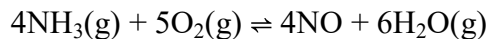


The potential energy profile for this reaction is given below:



- a) Write the equation for the overall reaction. (1)
- b) Which step in the mechanism is the rate determining step? Give a reason for your answer. (2)
- c) Identify an intermediate in the mechanism. (1)
- d) Derive the rate law for the reaction from the mechanism. (3)
- e) What can you conclude about the proposed mechanism if the experimentally determined rate law is found to be the same as that determined from the mechanism. (1)
- f) If the rate constant is found to be $1.00 \times 10^{-3} \text{ s}^{-1}$, what is the order of the reaction? (1)
 - i) Determine the half-life of the reaction. (1)
 - ii) Determine the time required for the concentration of NO to fall from 0.100M to 0.0750M. (3)

2) The reaction



has $\Delta H^\circ = -906.2 \text{ kJ mol}^{-1}$ and K_p is 3.97×10^{167} @25°C. (If your calculator can't handle the large numbers involved, use a spread sheet to do the calculations.)

- a) Calculate ΔG° , making sure to include units. What does the sign of this value tell you? (2)
- b) Calculate ΔG when the partial pressures of NO, H₂O, NH₃, and O₂ are 2.00, 2.50, 1.00×10^{-25} and 1.00×10^{-30} atm respectively and determine the direction of reaction under these conditions. (3)
- c) Estimate K_p at 1000°C. Why is this estimate liable to be very inaccurate? Is its magnitude relative to K_p at 25°C to be expected on the basis of Le Chatelier's principle? (5)

3) Determine the pH of each of the following solutions, all at 25°C:

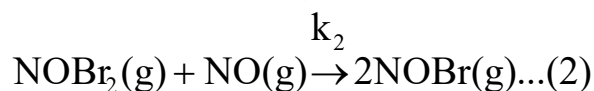
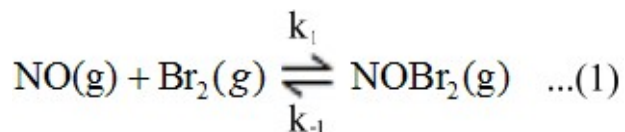
- a) 0.0200 M formic acid solution, $K_a(\text{HCO}_2\text{H}) = 1.77 \times 10^{-4}$.
- b) 0.0600 M sodium hydroxide solution.
- c) A mixture formed by adding 60.0cm³ of solution (a) to 20.00cm³ of solution (b).

Chemistry 225 Semester 04-2016

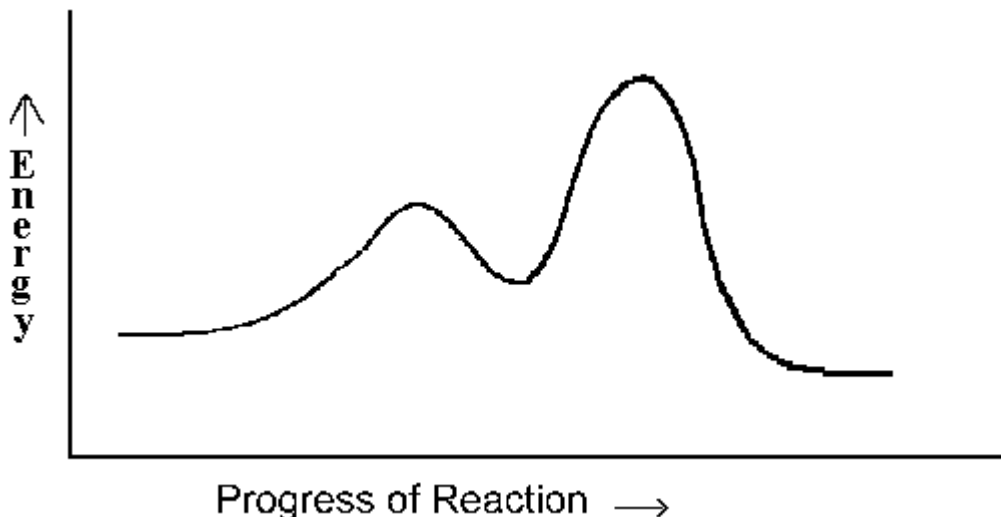
Homework for Submission #4a

Answer the following questions carefully and submit them for marking as instructed. Only answers showing full working may attract full marks. Careless and sloppy work will be penalised. Express your numerical answers to the correct number of significant figures. Make sure you include correct units where appropriate. *Answers showing evidence of copying will attract zero marks.*

- 1) The following mechanism has been proposed for the reaction of NO with Br₂ in the gaseous state:

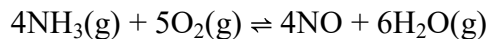


The potential energy profile for this reaction is given below:



- a) Write the equation for the overall reaction. (1)
- b) Which step in the mechanism is the rate determining step? Give a reason for your answer. (2)
- c) Identify an intermediate in the mechanism. (1)
- d) Derive the rate law for the reaction from the mechanism. (3)
- e) What can you conclude about the proposed mechanism if the experimentally determined rate law is found to be the same as that determined from the mechanism. (1)
- f) If the rate constant is found to be $1.00 \times 10^{-3} \text{ s}^{-1}$, what is the order of the reaction? (1)
 - i) Determine the half-life of the reaction. (1)
 - ii) Determine the time required for the concentration of NO to fall from 0.100M to 0.0750M. (3)

2) The reaction



has $\Delta H^\circ = -906.2 \text{ kJ mol}^{-1}$ and K_p is 3.97×10^{167} @25°C. (If your calculator can't handle the large numbers involved, use a spread sheet to do the calculations.)

- a) Calculate ΔG° , making sure to include units. What does the sign of this value tell you? (2)
- b) Calculate ΔG when the partial pressures of NO, H₂O, NH₃, and O₂ are 2.00, 2.50, 1.00×10^{-25} and 1.00×10^{-30} atm respectively and determine the direction of reaction under these conditions. (3)
- c) Estimate K_p at 1000°C. Why is this estimate liable to be very inaccurate? Is its magnitude relative to K_p at 25°C to be expected on the basis of Le Chatelier's principle? (5)

3) Determine the pH of each of the following solutions, all at 25°C:

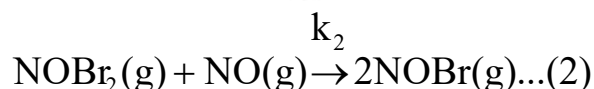
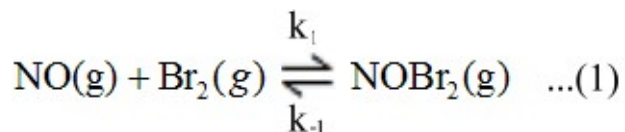
- a) 0.0200 M formic acid solution, $K_a(\text{HCO}_2\text{H}) = 1.77 \times 10^{-4}$.
- b) 0.0600 M sodium hydroxide solution.
- c) A mixture formed by adding 60.0cm³ of solution (a) to 20.00cm³ of solution (b).

Chemistry 225 Semester 04-2016

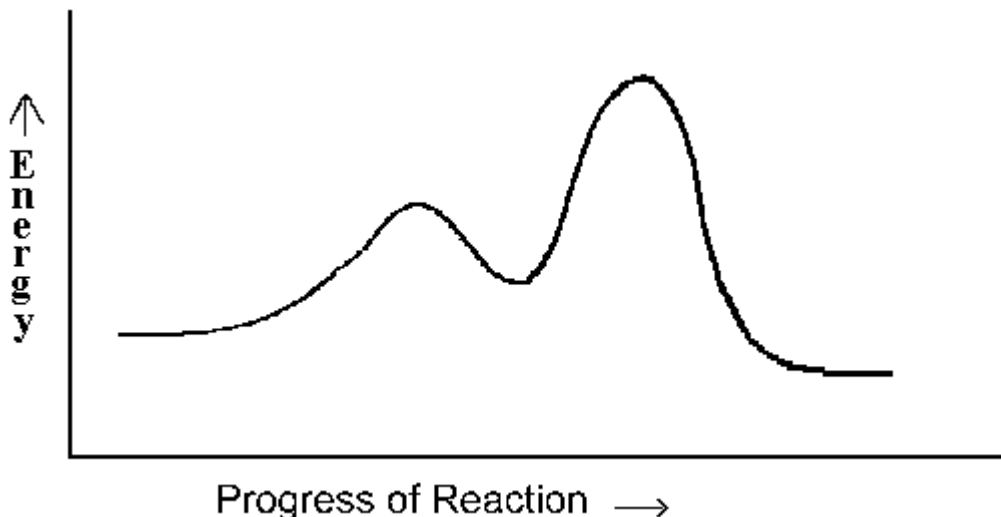
Homework for Submission #4a

Answer the following questions carefully and submit them for marking as instructed. Only answers showing full working may attract full marks. Careless and sloppy work will be penalised. Express your numerical answers to the correct number of significant figures. Make sure you include correct units where appropriate. *Answers showing evidence of copying will attract zero marks.*

- 1) The following mechanism has been proposed for the reaction of NO with Br₂ in the gaseous state:

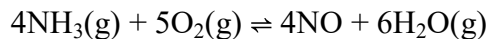


The potential energy profile for this reaction is given below:



- a) Write the equation for the overall reaction. (1)
- b) Which step in the mechanism is the rate determining step? Give a reason for your answer. (2)
- c) Identify an intermediate in the mechanism. (1)
- d) Derive the rate law for the reaction from the mechanism. (3)
- e) What can you conclude about the proposed mechanism if the experimentally determined rate law is found to be the same as that determined from the mechanism. (1)
- f) If the rate constant is found to be $1.00 \times 10^{-3} \text{ s}^{-1}$, what is the order of the reaction? (1)
 - i) Determine the half-life of the reaction. (1)
 - ii) Determine the time required for the concentration of NO to fall from 0.100M to 0.0750M. (3)

2) The reaction



has $\Delta H^\circ = -906.2 \text{ kJ mol}^{-1}$ and K_p is 3.97×10^{167} @25°C. (If your calculator can't handle the large numbers involved, use a spread sheet to do the calculations.)

- a) Calculate ΔG° , making sure to include units. What does the sign of this value tell you? (2)
- b) Calculate ΔG when the partial pressures of NO, H₂O, NH₃, and O₂ are 2.00, 2.50, 1.00×10^{-25} and 1.00×10^{-30} atm respectively and determine the direction of reaction under these conditions. (3)
- c) Estimate K_p at 1000°C. Why is this estimate liable to be very inaccurate? Is its magnitude relative to K_p at 25°C to be expected on the basis of Le Chatelier's principle? (5)

3) Determine the pH of each of the following solutions, all at 25°C:

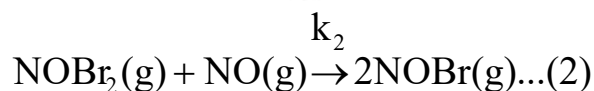
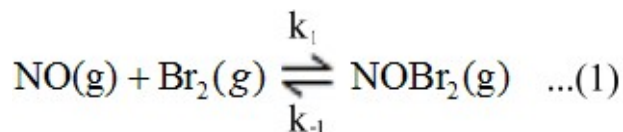
- a) 0.0200 M formic acid solution, $K_a(\text{HCO}_2\text{H}) = 1.77 \times 10^{-4}$.
- b) 0.0600 M sodium hydroxide solution.
- c) A mixture formed by adding 60.0cm³ of solution (a) to 20.00cm³ of solution (b).

Chemistry 225 Semester 04-2016

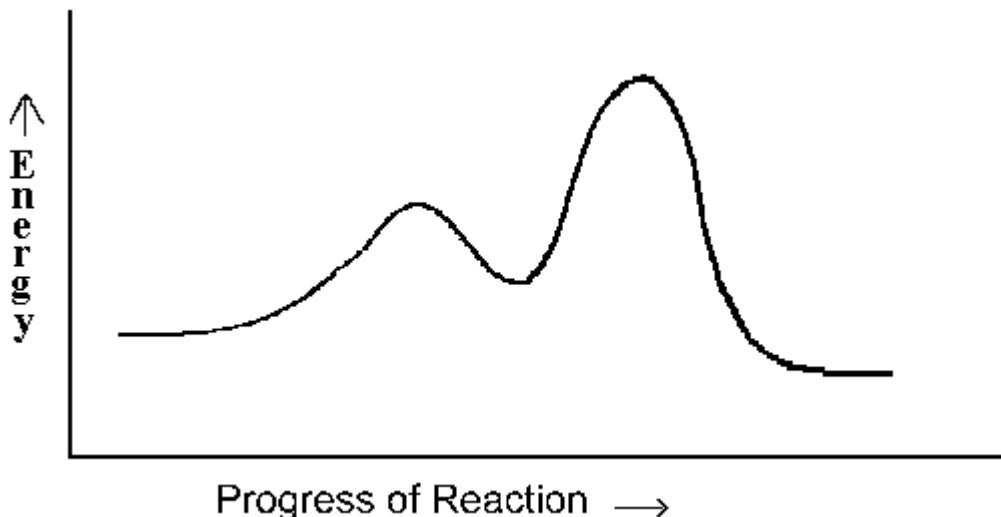
Homework for Submission #4a

Answer the following questions carefully and submit them for marking as instructed. Only answers showing full working may attract full marks. Careless and sloppy work will be penalised. Express your numerical answers to the correct number of significant figures. Make sure you include correct units where appropriate. *Answers showing evidence of copying will attract zero marks.*

- 1) The following mechanism has been proposed for the reaction of NO with Br₂ in the gaseous state:

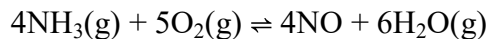


The potential energy profile for this reaction is given below:



- a) Write the equation for the overall reaction. (1)
- b) Which step in the mechanism is the rate determining step? Give a reason for your answer. (2)
- c) Identify an intermediate in the mechanism. (1)
- d) Derive the rate law for the reaction from the mechanism. (3)
- e) What can you conclude about the proposed mechanism if the experimentally determined rate law is found to be the same as that determined from the mechanism. (1)
- f) If the rate constant is found to be $1.00 \times 10^{-3} \text{ s}^{-1}$, what is the order of the reaction? (1)
 - i) Determine the half-life of the reaction. (1)
 - ii) Determine the time required for the concentration of NO to fall from 0.100M to 0.0750M. (3)

2) The reaction



has $\Delta H^\circ = -906.2 \text{ kJ mol}^{-1}$ and K_p is 3.97×10^{167} @25°C. (If your calculator can't handle the large numbers involved, use a spread sheet to do the calculations.)

- a) Calculate ΔG° , making sure to include units. What does the sign of this value tell you? (2)
- b) Calculate ΔG when the partial pressures of NO, H₂O, NH₃, and O₂ are 2.00, 2.50, 1.00×10^{-25} and 1.00×10^{-30} atm respectively and determine the direction of reaction under these conditions. (3)
- c) Estimate K_p at 1000°C. Why is this estimate liable to be very inaccurate? Is its magnitude relative to K_p at 25°C to be expected on the basis of Le Chatelier's principle? (5)

3) Determine the pH of each of the following solutions, all at 25°C:

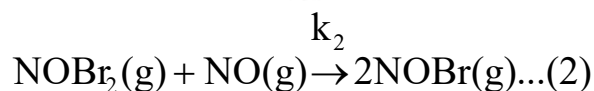
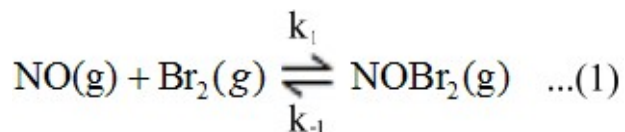
- a) 0.0200 M formic acid solution, $K_a(\text{HCO}_2\text{H}) = 1.77 \times 10^{-4}$.
- b) 0.0600 M sodium hydroxide solution.
- c) A mixture formed by adding 60.0cm³ of solution (a) to 20.00cm³ of solution (b).

Chemistry 225 Semester 04-2016

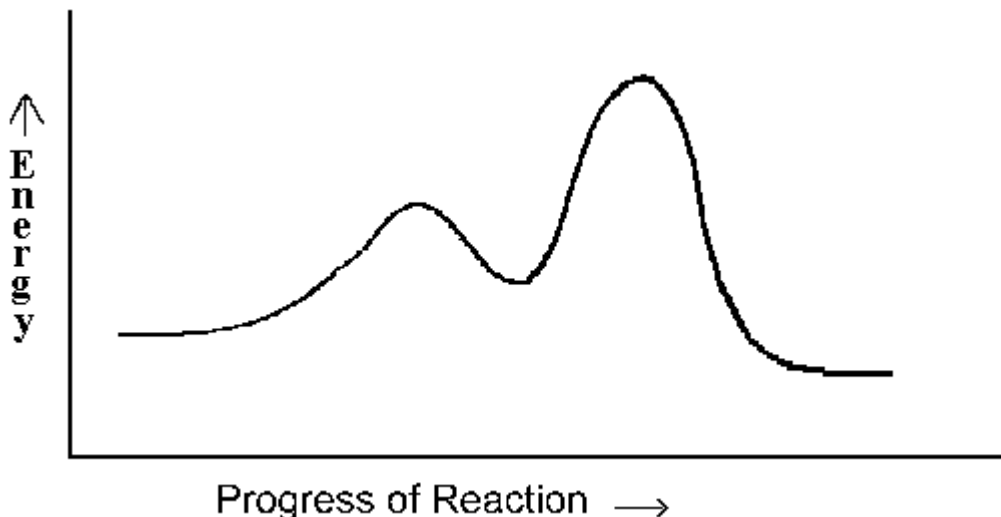
Homework for Submission #4a

Answer the following questions carefully and submit them for marking as instructed. Only answers showing full working may attract full marks. Careless and sloppy work will be penalised. Express your numerical answers to the correct number of significant figures. Make sure you include correct units where appropriate. *Answers showing evidence of copying will attract zero marks.*

- 1) The following mechanism has been proposed for the reaction of NO with Br₂ in the gaseous state:

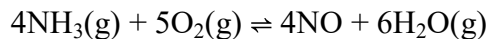


The potential energy profile for this reaction is given below:



- a) Write the equation for the overall reaction. (1)
- b) Which step in the mechanism is the rate determining step? Give a reason for your answer. (2)
- c) Identify an intermediate in the mechanism. (1)
- d) Derive the rate law for the reaction from the mechanism. (3)
- e) What can you conclude about the proposed mechanism if the experimentally determined rate law is found to be the same as that determined from the mechanism. (1)
- f) If the rate constant is found to be $1.00 \times 10^{-3} \text{ s}^{-1}$, what is the order of the reaction? (1)
 - i) Determine the half-life of the reaction. (1)
 - ii) Determine the time required for the concentration of NO to fall from 0.100M to 0.0750M. (3)

2) The reaction



has $\Delta H^\circ = -906.2 \text{ kJ mol}^{-1}$ and K_p is 3.97×10^{167} @25°C. (If your calculator can't handle the large numbers involved, use a spread sheet to do the calculations.)

- a) Calculate ΔG° , making sure to include units. What does the sign of this value tell you? (2)
- b) Calculate ΔG when the partial pressures of NO, H₂O, NH₃, and O₂ are 2.00, 2.50, 1.00×10^{-25} and 1.00×10^{-30} atm respectively and determine the direction of reaction under these conditions. (3)
- c) Estimate K_p at 1000°C. Why is this estimate liable to be very inaccurate? Is its magnitude relative to K_p at 25°C to be expected on the basis of Le Chatelier's principle? (5)

3) Determine the pH of each of the following solutions, all at 25°C:

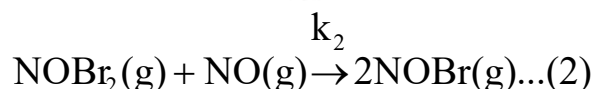
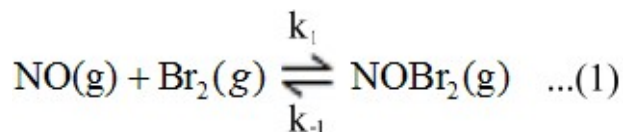
- a) 0.0200 M formic acid solution, $K_a(\text{HCO}_2\text{H}) = 1.77 \times 10^{-4}$.
- b) 0.0600 M sodium hydroxide solution.
- c) A mixture formed by adding 60.0cm³ of solution (a) to 20.00cm³ of solution (b).

Chemistry 225 Semester 04-2016

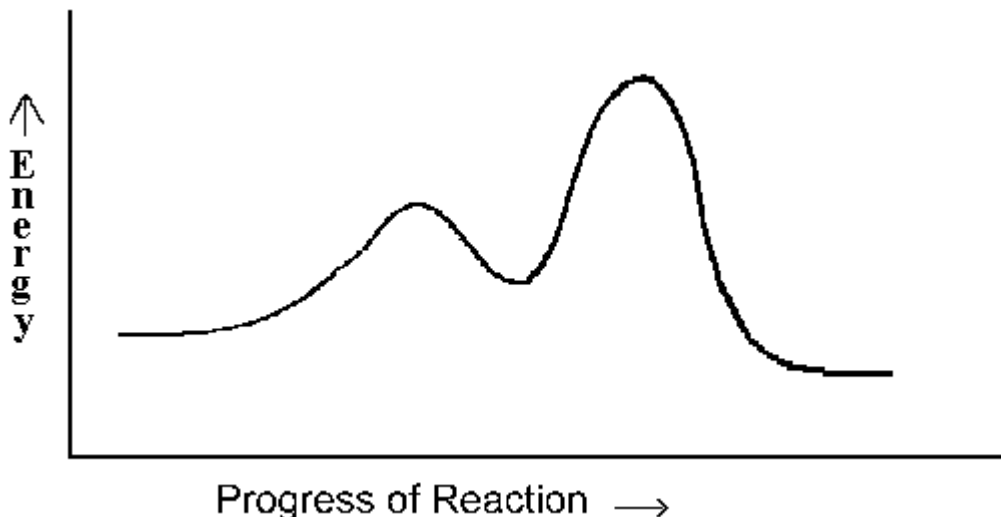
Homework for Submission #4a

Answer the following questions carefully and submit them for marking as instructed. Only answers showing full working may attract full marks. Careless and sloppy work will be penalised. Express your numerical answers to the correct number of significant figures. Make sure you include correct units where appropriate. *Answers showing evidence of copying will attract zero marks.*

- 1) The following mechanism has been proposed for the reaction of NO with Br₂ in the gaseous state:

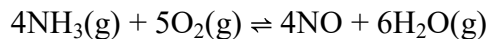


The potential energy profile for this reaction is given below:



- a) Write the equation for the overall reaction. (1)
- b) Which step in the mechanism is the rate determining step? Give a reason for your answer. (2)
- c) Identify an intermediate in the mechanism. (1)
- d) Derive the rate law for the reaction from the mechanism. (3)
- e) What can you conclude about the proposed mechanism if the experimentally determined rate law is found to be the same as that determined from the mechanism. (1)
- f) If the rate constant is found to be $1.00 \times 10^{-3} \text{ s}^{-1}$, what is the order of the reaction? (1)
 - i) Determine the half-life of the reaction. (1)
 - ii) Determine the time required for the concentration of NO to fall from 0.100M to 0.0750M. (3)

2) The reaction



has $\Delta H^\circ = -906.2 \text{ kJ mol}^{-1}$ and K_p is 3.97×10^{167} @25°C. (If your calculator can't handle the large numbers involved, use a spread sheet to do the calculations.)

- a) Calculate ΔG° , making sure to include units. What does the sign of this value tell you? (2)
- b) Calculate ΔG when the partial pressures of NO, H₂O, NH₃, and O₂ are 2.00, 2.50, 1.00×10^{-25} and 1.00×10^{-30} atm respectively and determine the direction of reaction under these conditions. (3)
- c) Estimate K_p at 1000°C. Why is this estimate liable to be very inaccurate? Is its magnitude relative to K_p at 25°C to be expected on the basis of Le Chatelier's principle? (5)

3) Determine the pH of each of the following solutions, all at 25°C:

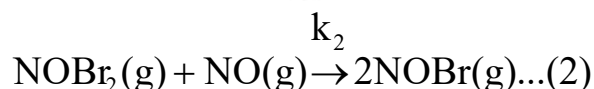
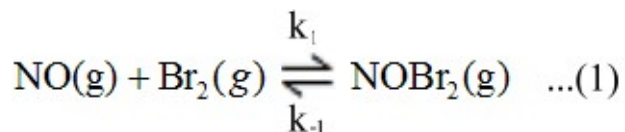
- a) 0.0200 M formic acid solution, $K_a(\text{HCO}_2\text{H}) = 1.77 \times 10^{-4}$.
- b) 0.0600 M sodium hydroxide solution.
- c) A mixture formed by adding 60.0cm³ of solution (a) to 20.00cm³ of solution (b).

Chemistry 225 Semester 04-2016

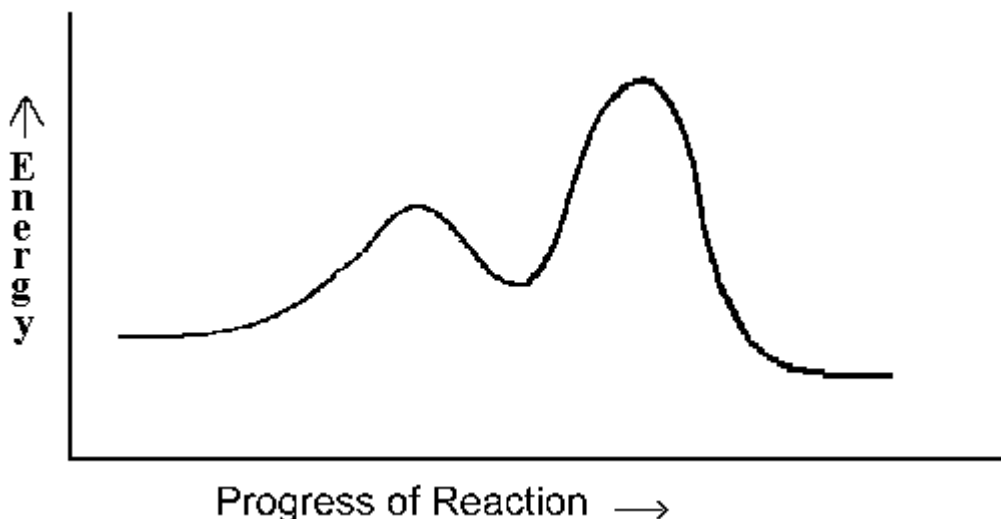
Homework for Submission #4a

Answer the following questions carefully and submit them for marking as instructed. Only answers showing full working may attract full marks. Careless and sloppy work will be penalised. Express your numerical answers to the correct number of significant figures. Make sure you include correct units where appropriate. *Answers showing evidence of copying will attract zero marks.*

- 1) The following mechanism has been proposed for the reaction of NO with Br₂ in the gaseous state:

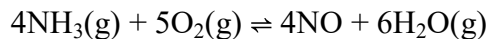


The potential energy profile for this reaction is given below:



- Write the equation for the overall reaction. (1)
- Which step in the mechanism is the rate determining step? Give a reason for your answer. (2)
- Identify an intermediate in the mechanism. (1)
- Derive the rate law for the reaction from the mechanism. (3)
- What can you conclude about the proposed mechanism if the experimentally determined rate law is found to be the same as that determined from the mechanism. (1)
- If the rate constant is found to be $1.00 \times 10^{-3} \text{ s}^{-1}$, what is the order of the reaction? (1)
 - Determine the half-life of the reaction. (1)
 - Determine the time required for the concentration of NO to fall from 0.100M to 0.0750M. (3)

2) The reaction



has $\Delta H^\circ = -906.2 \text{ kJ mol}^{-1}$ and K_p is 3.97×10^{167} @25°C. (If your calculator can't handle the large numbers involved, use a spread sheet to do the calculations.)

- a) Calculate ΔG° , making sure to include units. What does the sign of this value tell you? (2)
- b) Calculate ΔG when the partial pressures of NO, H₂O, NH₃, and O₂ are 2.00, 2.50, 1.00×10^{-25} and 1.00×10^{-30} atm respectively and determine the direction of reaction under these conditions. (3)
- c) Estimate K_p at 1000°C. Why is this estimate liable to be very inaccurate? Is its magnitude relative to K_p at 25°C to be expected on the basis of Le Chatelier's principle? (5)

3) Determine the pH of each of the following solutions, all at 25°C:

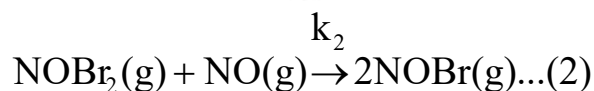
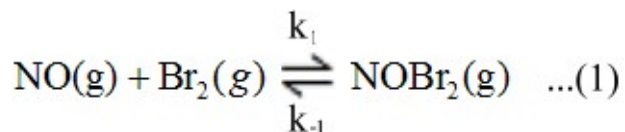
- a) 0.0200 M formic acid solution, $K_a(\text{HCO}_2\text{H}) = 1.77 \times 10^{-4}$.
- b) 0.0600 M sodium hydroxide solution.
- c) A mixture formed by adding 60.0cm³ of solution (a) to 20.00cm³ of solution (b).

Chemistry 225 Semester 04-2016

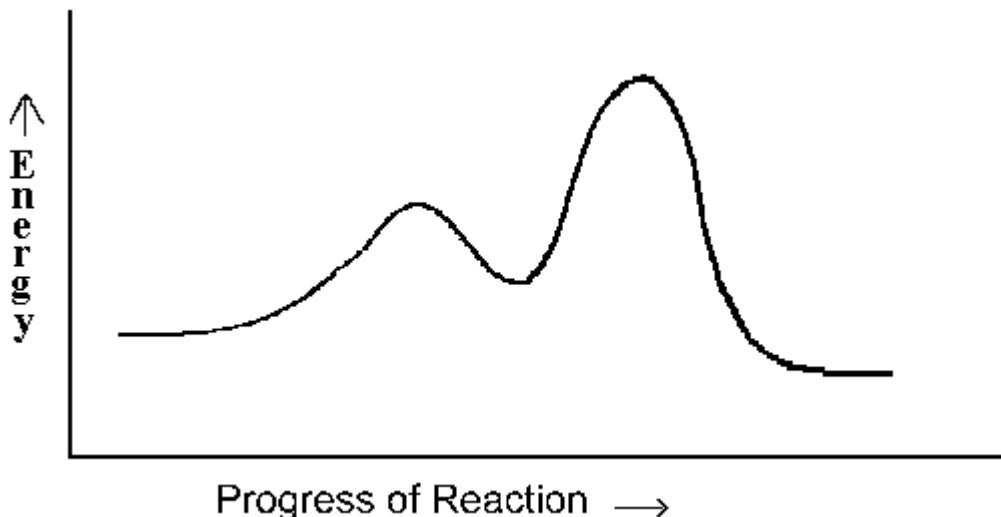
Homework for Submission #4a

Answer the following questions carefully and submit them for marking as instructed. Only answers showing full working may attract full marks. Careless and sloppy work will be penalised. Express your numerical answers to the correct number of significant figures. Make sure you include correct units where appropriate. *Answers showing evidence of copying will attract zero marks.*

- 1) The following mechanism has been proposed for the reaction of NO with Br₂ in the gaseous state:

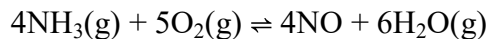


The potential energy profile for this reaction is given below:



- a) Write the equation for the overall reaction. (1)
- b) Which step in the mechanism is the rate determining step? Give a reason for your answer. (2)
- c) Identify an intermediate in the mechanism. (1)
- d) Derive the rate law for the reaction from the mechanism. (3)
- e) What can you conclude about the proposed mechanism if the experimentally determined rate law is found to be the same as that determined from the mechanism. (1)
- f) If the rate constant is found to be $1.00 \times 10^{-3} \text{ s}^{-1}$, what is the order of the reaction? (1)
 - i) Determine the half-life of the reaction. (1)
 - ii) Determine the time required for the concentration of NO to fall from 0.100M to 0.0750M. (3)

2) The reaction



has $\Delta H^\circ = -906.2 \text{ kJ mol}^{-1}$ and K_p is 3.97×10^{167} @25°C. (If your calculator can't handle the large numbers involved, use a spread sheet to do the calculations.)

- a) Calculate ΔG° , making sure to include units. What does the sign of this value tell you? (2)
- b) Calculate ΔG when the partial pressures of NO, H₂O, NH₃, and O₂ are 2.00, 2.50, 1.00×10^{-25} and 1.00×10^{-30} atm respectively and determine the direction of reaction under these conditions. (3)
- c) Estimate K_p at 1000°C. Why is this estimate liable to be very inaccurate? Is its magnitude relative to K_p at 25°C to be expected on the basis of Le Chatelier's principle? (5)

3) Determine the pH of each of the following solutions, all at 25°C:

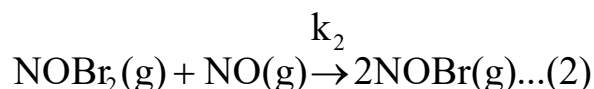
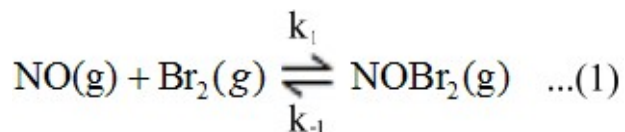
- a) 0.0200 M formic acid solution, $K_a(\text{HCO}_2\text{H}) = 1.77 \times 10^{-4}$.
- b) 0.0600 M sodium hydroxide solution.
- c) A mixture formed by adding 60.0cm³ of solution (a) to 20.00cm³ of solution (b).

Chemistry 225 Semester 04-2016

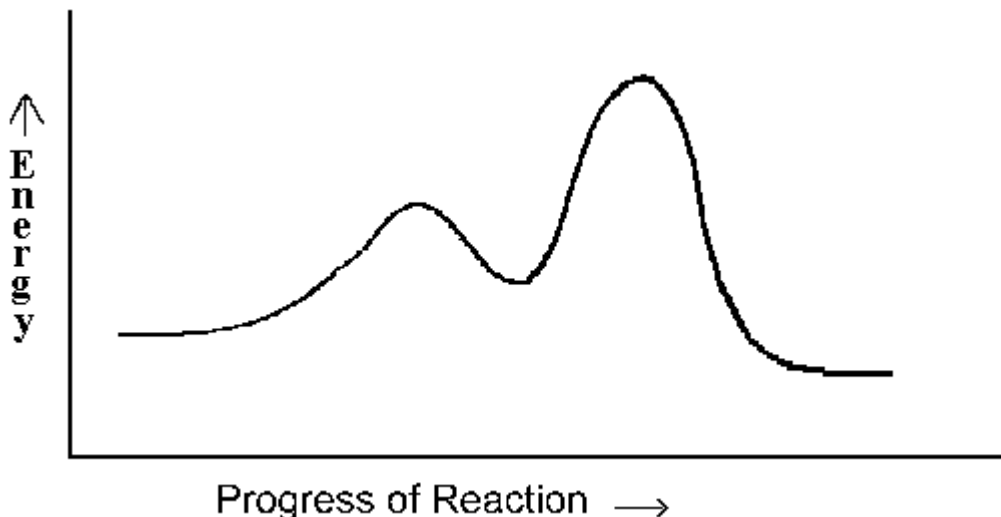
Homework for Submission #4a

Answer the following questions carefully and submit them for marking as instructed. Only answers showing full working may attract full marks. Careless and sloppy work will be penalised. Express your numerical answers to the correct number of significant figures. Make sure you include correct units where appropriate. *Answers showing evidence of copying will attract zero marks.*

- 1) The following mechanism has been proposed for the reaction of NO with Br₂ in the gaseous state:

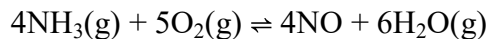


The potential energy profile for this reaction is given below:



- a) Write the equation for the overall reaction. (1)
- b) Which step in the mechanism is the rate determining step? Give a reason for your answer. (2)
- c) Identify an intermediate in the mechanism. (1)
- d) Derive the rate law for the reaction from the mechanism. (3)
- e) What can you conclude about the proposed mechanism if the experimentally determined rate law is found to be the same as that determined from the mechanism. (1)
- f) If the rate constant is found to be $1.00 \times 10^{-3} \text{ s}^{-1}$, what is the order of the reaction? (1)
 - i) Determine the half-life of the reaction. (1)
 - ii) Determine the time required for the concentration of NO to fall from 0.100M to 0.0750M. (3)

2) The reaction



has $\Delta H^\circ = -906.2 \text{ kJ mol}^{-1}$ and K_p is 3.97×10^{167} @25°C. (If your calculator can't handle the large numbers involved, use a spread sheet to do the calculations.)

- a) Calculate ΔG° , making sure to include units. What does the sign of this value tell you? (2)
- b) Calculate ΔG when the partial pressures of NO, H₂O, NH₃, and O₂ are 2.00, 2.50, 1.00×10^{-25} and 1.00×10^{-30} atm respectively and determine the direction of reaction under these conditions. (3)
- c) Estimate K_p at 1000°C. Why is this estimate liable to be very inaccurate? Is its magnitude relative to K_p at 25°C to be expected on the basis of Le Chatelier's principle? (5)

3) Determine the pH of each of the following solutions, all at 25°C:

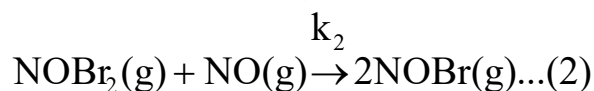
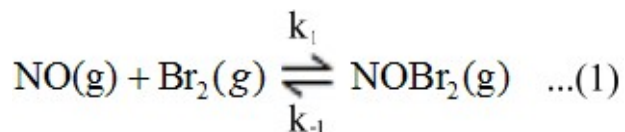
- a) 0.0200 M formic acid solution, $K_a(\text{HCO}_2\text{H}) = 1.77 \times 10^{-4}$.
- b) 0.0600 M sodium hydroxide solution.
- c) A mixture formed by adding 60.0cm³ of solution (a) to 20.00cm³ of solution (b).

Chemistry 225 Semester 04-2016

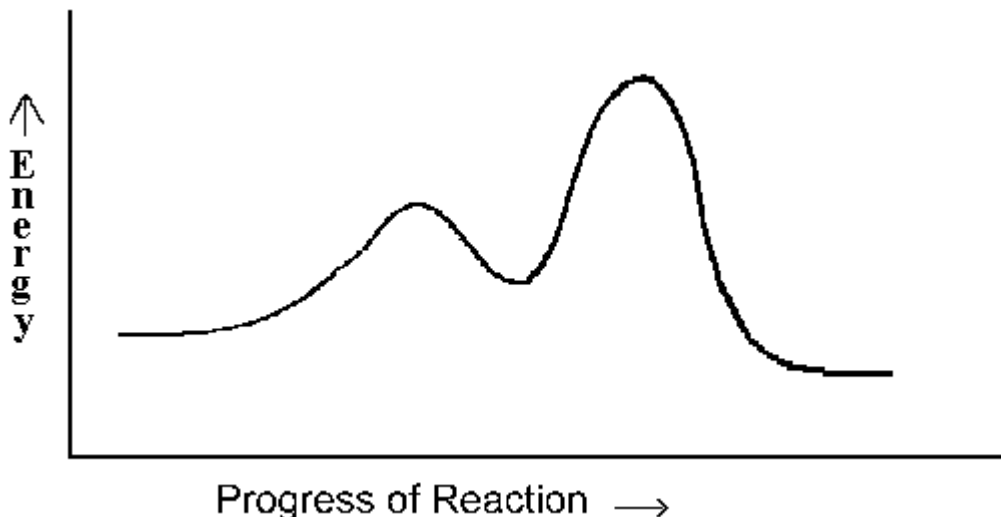
Homework for Submission #4a

Answer the following questions carefully and submit them for marking as instructed. Only answers showing full working may attract full marks. Careless and sloppy work will be penalised. Express your numerical answers to the correct number of significant figures. Make sure you include correct units where appropriate. *Answers showing evidence of copying will attract zero marks.*

- 1) The following mechanism has been proposed for the reaction of NO with Br₂ in the gaseous state:

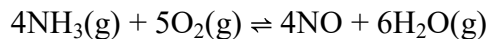


The potential energy profile for this reaction is given below:



- a) Write the equation for the overall reaction. (1)
- b) Which step in the mechanism is the rate determining step? Give a reason for your answer. (2)
- c) Identify an intermediate in the mechanism. (1)
- d) Derive the rate law for the reaction from the mechanism. (3)
- e) What can you conclude about the proposed mechanism if the experimentally determined rate law is found to be the same as that determined from the mechanism. (1)
- f) If the rate constant is found to be $1.00 \times 10^{-3} \text{ s}^{-1}$, what is the order of the reaction? (1)
 - i) Determine the half-life of the reaction. (1)
 - ii) Determine the time required for the concentration of NO to fall from 0.100M to 0.0750M. (3)

2) The reaction



has $\Delta H^\circ = -906.2 \text{ kJ mol}^{-1}$ and K_p is 3.97×10^{167} @25°C. (If your calculator can't handle the large numbers involved, use a spread sheet to do the calculations.)

- a) Calculate ΔG° , making sure to include units. What does the sign of this value tell you? (2)
- b) Calculate ΔG when the partial pressures of NO, H₂O, NH₃, and O₂ are 2.00, 2.50, 1.00×10^{-25} and 1.00×10^{-30} atm respectively and determine the direction of reaction under these conditions. (3)
- c) Estimate K_p at 1000°C. Why is this estimate liable to be very inaccurate? Is its magnitude relative to K_p at 25°C to be expected on the basis of Le Chatelier's principle? (5)

3) Determine the pH of each of the following solutions, all at 25°C:

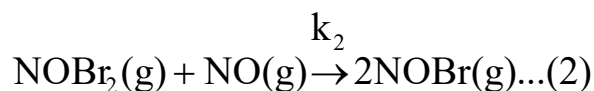
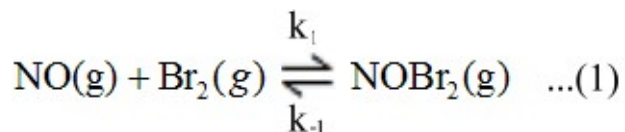
- a) 0.0200 M formic acid solution, $K_a(\text{HCO}_2\text{H}) = 1.77 \times 10^{-4}$.
- b) 0.0600 M sodium hydroxide solution.
- c) A mixture formed by adding 60.0cm³ of solution (a) to 20.00cm³ of solution (b).

Chemistry 225 Semester 04-2016

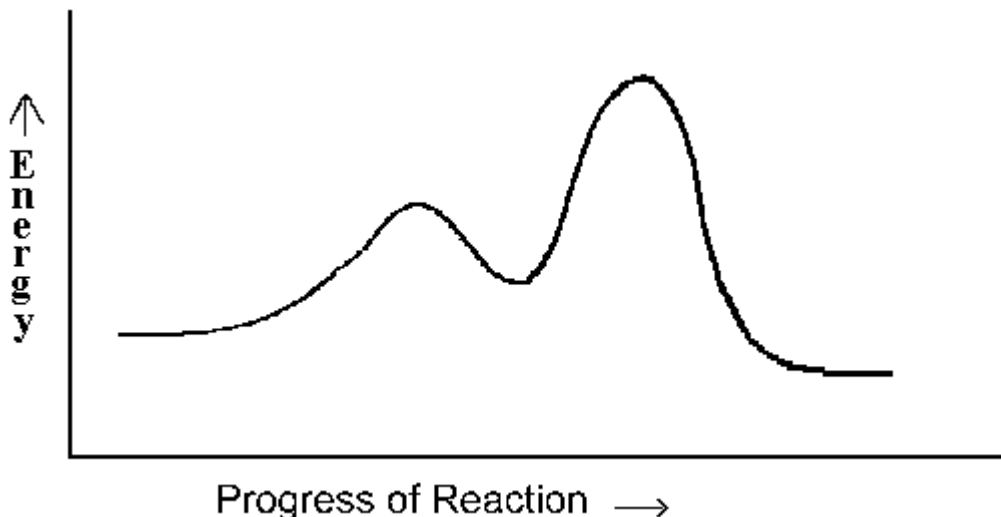
Homework for Submission #4a

Answer the following questions carefully and submit them for marking as instructed. Only answers showing full working may attract full marks. Careless and sloppy work will be penalised. Express your numerical answers to the correct number of significant figures. Make sure you include correct units where appropriate. *Answers showing evidence of copying will attract zero marks.*

- 1) The following mechanism has been proposed for the reaction of NO with Br₂ in the gaseous state:

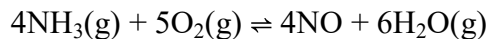


The potential energy profile for this reaction is given below:



- a) Write the equation for the overall reaction. (1)
- b) Which step in the mechanism is the rate determining step? Give a reason for your answer. (2)
- c) Identify an intermediate in the mechanism. (1)
- d) Derive the rate law for the reaction from the mechanism. (3)
- e) What can you conclude about the proposed mechanism if the experimentally determined rate law is found to be the same as that determined from the mechanism. (1)
- f) If the rate constant is found to be $1.00 \times 10^{-3} \text{ s}^{-1}$, what is the order of the reaction? (1)
 - i) Determine the half-life of the reaction. (1)
 - ii) Determine the time required for the concentration of NO to fall from 0.100M to 0.0750M. (3)

2) The reaction



has $\Delta H^\circ = -906.2 \text{ kJ mol}^{-1}$ and K_p is 3.97×10^{167} @25°C. (If your calculator can't handle the large numbers involved, use a spread sheet to do the calculations.)

- a) Calculate ΔG° , making sure to include units. What does the sign of this value tell you? (2)
- b) Calculate ΔG when the partial pressures of NO, H₂O, NH₃, and O₂ are 2.00, 2.50, 1.00×10^{-25} and 1.00×10^{-30} atm respectively and determine the direction of reaction under these conditions. (3)
- c) Estimate K_p at 1000°C. Why is this estimate liable to be very inaccurate? Is its magnitude relative to K_p at 25°C to be expected on the basis of Le Chatelier's principle? (5)

3) Determine the pH of each of the following solutions, all at 25°C:

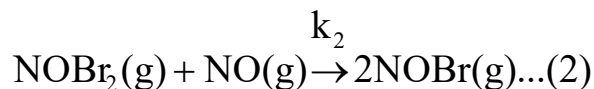
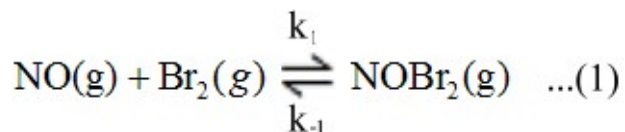
- a) 0.0200 M formic acid solution, $K_a(\text{HCO}_2\text{H}) = 1.77 \times 10^{-4}$.
- b) 0.0600 M sodium hydroxide solution.
- c) A mixture formed by adding 60.0cm³ of solution (a) to 20.00cm³ of solution (b).

Chemistry 225 Semester 04-2016

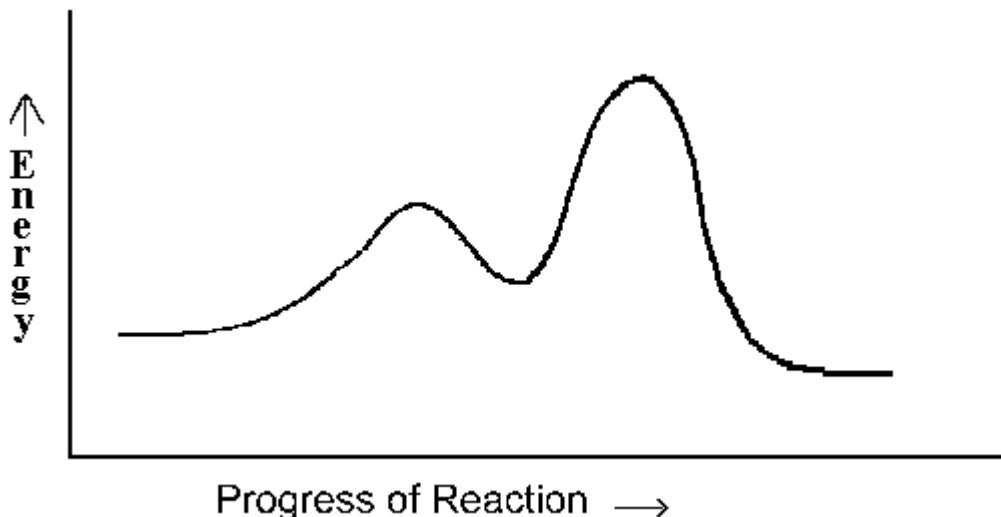
Homework for Submission #4a

Answer the following questions carefully and submit them for marking as instructed. Only answers showing full working may attract full marks. Careless and sloppy work will be penalised. Express your numerical answers to the correct number of significant figures. Make sure you include correct units where appropriate. *Answers showing evidence of copying will attract zero marks.*

- 1) The following mechanism has been proposed for the reaction of NO with Br₂ in the gaseous state:

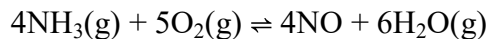


The potential energy profile for this reaction is given below:



- a) Write the equation for the overall reaction. (1)
- b) Which step in the mechanism is the rate determining step? Give a reason for your answer. (2)
- c) Identify an intermediate in the mechanism. (1)
- d) Derive the rate law for the reaction from the mechanism. (3)
- e) What can you conclude about the proposed mechanism if the experimentally determined rate law is found to be the same as that determined from the mechanism. (1)
- f) If the rate constant is found to be $1.00 \times 10^{-3} \text{ s}^{-1}$, what is the order of the reaction? (1)
 - i) Determine the half-life of the reaction. (1)
 - ii) Determine the time required for the concentration of NO to fall from 0.100M to 0.0750M. (3)

2) The reaction



has $\Delta H^\circ = -906.2 \text{ kJ mol}^{-1}$ and K_p is 3.97×10^{167} @25°C. (If your calculator can't handle the large numbers involved, use a spread sheet to do the calculations.)

- a) Calculate ΔG° , making sure to include units. What does the sign of this value tell you? (2)
- b) Calculate ΔG when the partial pressures of NO, H₂O, NH₃, and O₂ are 2.00, 2.50, 1.00×10^{-25} and 1.00×10^{-30} atm respectively and determine the direction of reaction under these conditions. (3)
- c) Estimate K_p at 1000°C. Why is this estimate liable to be very inaccurate? Is its magnitude relative to K_p at 25°C to be expected on the basis of Le Chatelier's principle? (5)

3) Determine the pH of each of the following solutions, all at 25°C:

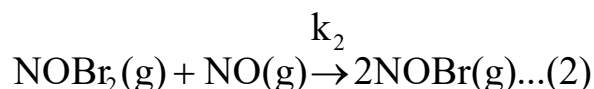
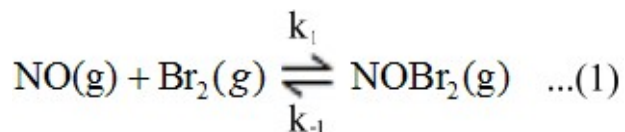
- a) 0.0200 M formic acid solution, $K_a(\text{HCO}_2\text{H}) = 1.77 \times 10^{-4}$.
- b) 0.0600 M sodium hydroxide solution.
- c) A mixture formed by adding 60.0cm³ of solution (a) to 20.00cm³ of solution (b).

Chemistry 225 Semester 04-2016

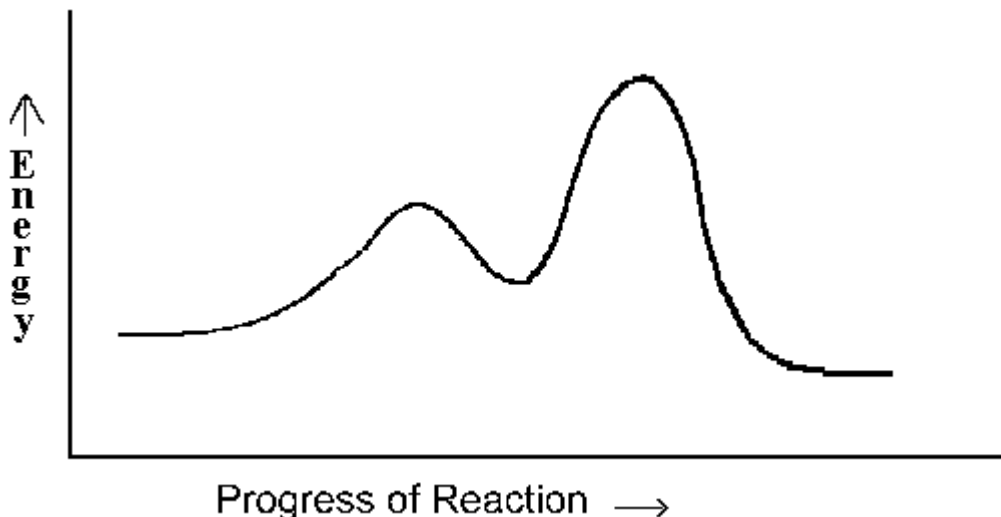
Homework for Submission #4a

Answer the following questions carefully and submit them for marking as instructed. Only answers showing full working may attract full marks. Careless and sloppy work will be penalised. Express your numerical answers to the correct number of significant figures. Make sure you include correct units where appropriate. *Answers showing evidence of copying will attract zero marks.*

- 1) The following mechanism has been proposed for the reaction of NO with Br₂ in the gaseous state:

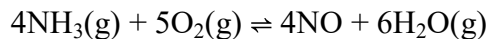


The potential energy profile for this reaction is given below:



- a) Write the equation for the overall reaction. (1)
- b) Which step in the mechanism is the rate determining step? Give a reason for your answer. (2)
- c) Identify an intermediate in the mechanism. (1)
- d) Derive the rate law for the reaction from the mechanism. (3)
- e) What can you conclude about the proposed mechanism if the experimentally determined rate law is found to be the same as that determined from the mechanism. (1)
- f) If the rate constant is found to be $1.00 \times 10^{-3} \text{ s}^{-1}$, what is the order of the reaction? (1)
 - i) Determine the half-life of the reaction. (1)
 - ii) Determine the time required for the concentration of NO to fall from 0.100M to 0.0750M. (3)

2) The reaction



has $\Delta H^\circ = -906.2 \text{ kJ mol}^{-1}$ and K_p is 3.97×10^{167} @25°C. (If your calculator can't handle the large numbers involved, use a spread sheet to do the calculations.)

- a) Calculate ΔG° , making sure to include units. What does the sign of this value tell you? (2)
- b) Calculate ΔG when the partial pressures of NO, H₂O, NH₃, and O₂ are 2.00, 2.50, 1.00×10^{-25} and 1.00×10^{-30} atm respectively and determine the direction of reaction under these conditions. (3)
- c) Estimate K_p at 1000°C. Why is this estimate liable to be very inaccurate? Is its magnitude relative to K_p at 25°C to be expected on the basis of Le Chatelier's principle? (5)

3) Determine the pH of each of the following solutions, all at 25°C:

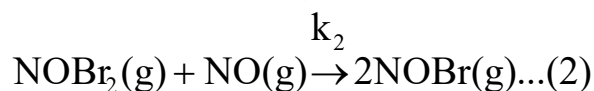
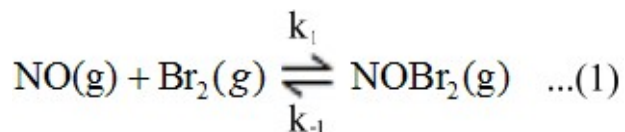
- a) 0.0200 M formic acid solution, $K_a(\text{HCO}_2\text{H}) = 1.77 \times 10^{-4}$.
- b) 0.0600 M sodium hydroxide solution.
- c) A mixture formed by adding 60.0cm³ of solution (a) to 20.00cm³ of solution (b).

Chemistry 225 Semester 04-2016

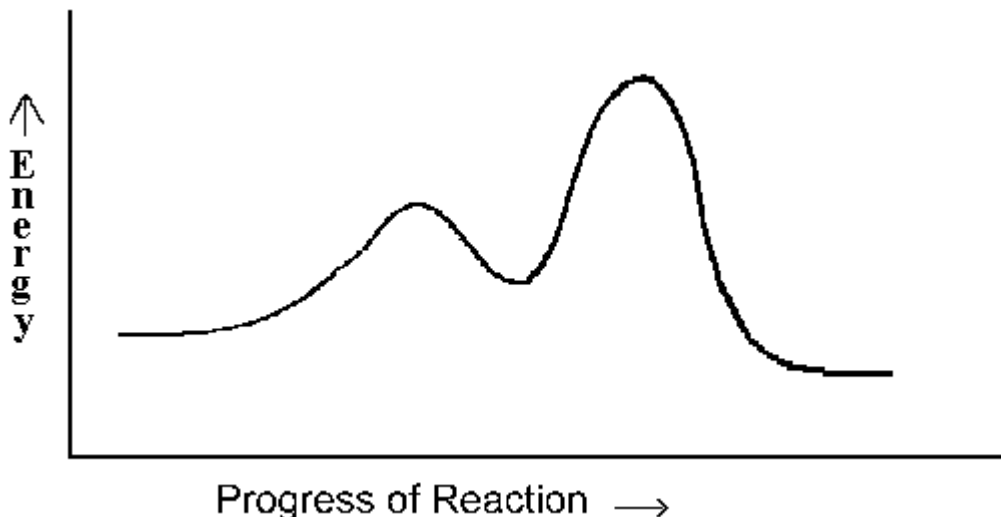
Homework for Submission #4a

Answer the following questions carefully and submit them for marking as instructed. Only answers showing full working may attract full marks. Careless and sloppy work will be penalised. Express your numerical answers to the correct number of significant figures. Make sure you include correct units where appropriate. *Answers showing evidence of copying will attract zero marks.*

- 1) The following mechanism has been proposed for the reaction of NO with Br₂ in the gaseous state:

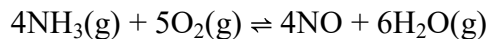


The potential energy profile for this reaction is given below:



- a) Write the equation for the overall reaction. (1)
- b) Which step in the mechanism is the rate determining step? Give a reason for your answer. (2)
- c) Identify an intermediate in the mechanism. (1)
- d) Derive the rate law for the reaction from the mechanism. (3)
- e) What can you conclude about the proposed mechanism if the experimentally determined rate law is found to be the same as that determined from the mechanism. (1)
- f) If the rate constant is found to be $1.00 \times 10^{-3} \text{ s}^{-1}$, what is the order of the reaction? (1)
 - i) Determine the half-life of the reaction. (1)
 - ii) Determine the time required for the concentration of NO to fall from 0.100M to 0.0750M. (3)

2) The reaction



has $\Delta H^\circ = -906.2 \text{ kJ mol}^{-1}$ and K_p is 3.97×10^{167} @25°C. (If your calculator can't handle the large numbers involved, use a spread sheet to do the calculations.)

- a) Calculate ΔG° , making sure to include units. What does the sign of this value tell you? (2)
- b) Calculate ΔG when the partial pressures of NO, H₂O, NH₃, and O₂ are 2.00, 2.50, 1.00×10^{-25} and 1.00×10^{-30} atm respectively and determine the direction of reaction under these conditions. (3)
- c) Estimate K_p at 1000°C. Why is this estimate liable to be very inaccurate? Is its magnitude relative to K_p at 25°C to be expected on the basis of Le Chatelier's principle? (5)

3) Determine the pH of each of the following solutions, all at 25°C:

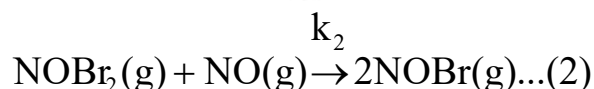
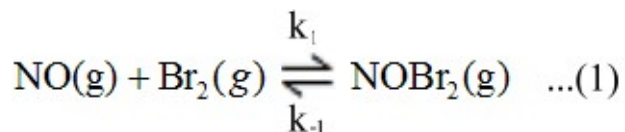
- a) 0.0200 M formic acid solution, $K_a(\text{HCO}_2\text{H}) = 1.77 \times 10^{-4}$.
- b) 0.0600 M sodium hydroxide solution.
- c) A mixture formed by adding 60.0cm³ of solution (a) to 20.00cm³ of solution (b).

Chemistry 225 Semester 04-2016

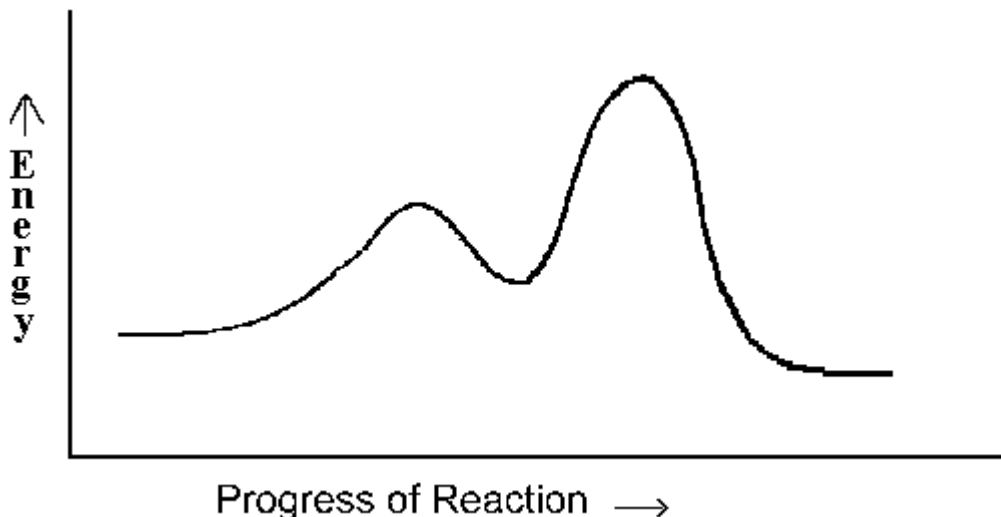
Homework for Submission #4a

Answer the following questions carefully and submit them for marking as instructed. Only answers showing full working may attract full marks. Careless and sloppy work will be penalised. Express your numerical answers to the correct number of significant figures. Make sure you include correct units where appropriate. *Answers showing evidence of copying will attract zero marks.*

- 1) The following mechanism has been proposed for the reaction of NO with Br₂ in the gaseous state:

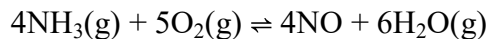


The potential energy profile for this reaction is given below:



- a) Write the equation for the overall reaction. (1)
- b) Which step in the mechanism is the rate determining step? Give a reason for your answer. (2)
- c) Identify an intermediate in the mechanism. (1)
- d) Derive the rate law for the reaction from the mechanism. (3)
- e) What can you conclude about the proposed mechanism if the experimentally determined rate law is found to be the same as that determined from the mechanism. (1)
- f) If the rate constant is found to be $1.00 \times 10^{-3} \text{ s}^{-1}$, what is the order of the reaction? (1)
 - i) Determine the half-life of the reaction. (1)
 - ii) Determine the time required for the concentration of NO to fall from 0.100M to 0.0750M. (3)

2) The reaction



has $\Delta H^\circ = -906.2 \text{ kJ mol}^{-1}$ and K_p is 3.97×10^{167} @25°C. (If your calculator can't handle the large numbers involved, use a spread sheet to do the calculations.)

- a) Calculate ΔG° , making sure to include units. What does the sign of this value tell you? (2)
- b) Calculate ΔG when the partial pressures of NO, H₂O, NH₃, and O₂ are 2.00, 2.50, 1.00×10^{-25} and 1.00×10^{-30} atm respectively and determine the direction of reaction under these conditions. (3)
- c) Estimate K_p at 1000°C. Why is this estimate liable to be very inaccurate? Is its magnitude relative to K_p at 25°C to be expected on the basis of Le Chatelier's principle? (5)

3) Determine the pH of each of the following solutions, all at 25°C:

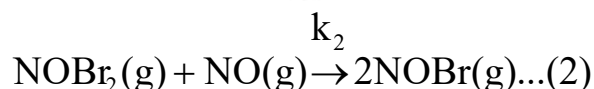
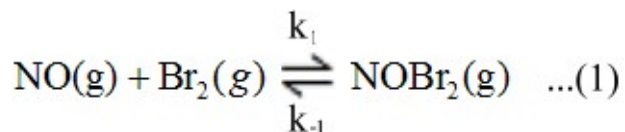
- a) 0.0200 M formic acid solution, $K_a(\text{HCO}_2\text{H}) = 1.77 \times 10^{-4}$.
- b) 0.0600 M sodium hydroxide solution.
- c) A mixture formed by adding 60.0cm³ of solution (a) to 20.00cm³ of solution (b).

Chemistry 225 Semester 04-2016

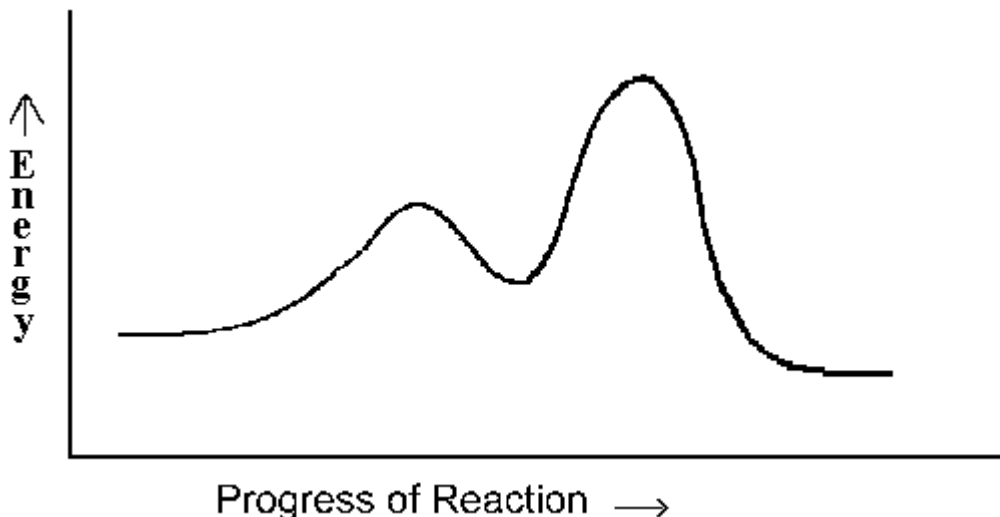
Homework for Submission #4a

Answer the following questions carefully and submit them for marking as instructed. Only answers showing full working may attract full marks. Careless and sloppy work will be penalised. Express your numerical answers to the correct number of significant figures. Make sure you include correct units where appropriate. *Answers showing evidence of copying will attract zero marks.*

- 1) The following mechanism has been proposed for the reaction of NO with Br₂ in the gaseous state:

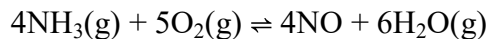


The potential energy profile for this reaction is given below:



- a) Write the equation for the overall reaction. (1)
- b) Which step in the mechanism is the rate determining step? Give a reason for your answer. (2)
- c) Identify an intermediate in the mechanism. (1)
- d) Derive the rate law for the reaction from the mechanism. (3)
- e) What can you conclude about the proposed mechanism if the experimentally determined rate law is found to be the same as that determined from the mechanism. (1)
- f) If the rate constant is found to be $1.00 \times 10^{-3} \text{ s}^{-1}$, what is the order of the reaction? (1)
 - i) Determine the half-life of the reaction. (1)
 - ii) Determine the time required for the concentration of NO to fall from 0.100M to 0.0750M. (3)

2) The reaction



has $\Delta H^\circ = -906.2 \text{ kJ mol}^{-1}$ and K_p is 3.97×10^{167} @25°C. (If your calculator can't handle the large numbers involved, use a spread sheet to do the calculations.)

- a) Calculate ΔG° , making sure to include units. What does the sign of this value tell you? (2)
- b) Calculate ΔG when the partial pressures of NO, H₂O, NH₃, and O₂ are 2.00, 2.50, 1.00×10^{-25} and 1.00×10^{-30} atm respectively and determine the direction of reaction under these conditions. (3)
- c) Estimate K_p at 1000°C. Why is this estimate liable to be very inaccurate? Is its magnitude relative to K_p at 25°C to be expected on the basis of Le Chatelier's principle? (5)

3) Determine the pH of each of the following solutions, all at 25°C:

- a) 0.0200 M formic acid solution, $K_a(\text{HCO}_2\text{H}) = 1.77 \times 10^{-4}$.
- b) 0.0600 M sodium hydroxide solution.
- c) A mixture formed by adding 60.0cm³ of solution (a) to 20.00cm³ of solution (b).